


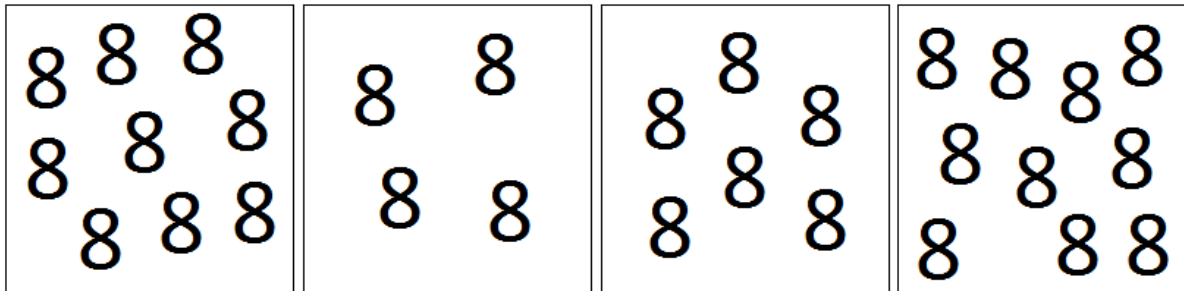
tafeltje

van



naam:

Schrijf de som op die bij het plaatje hoort en bereken de uitkomst.

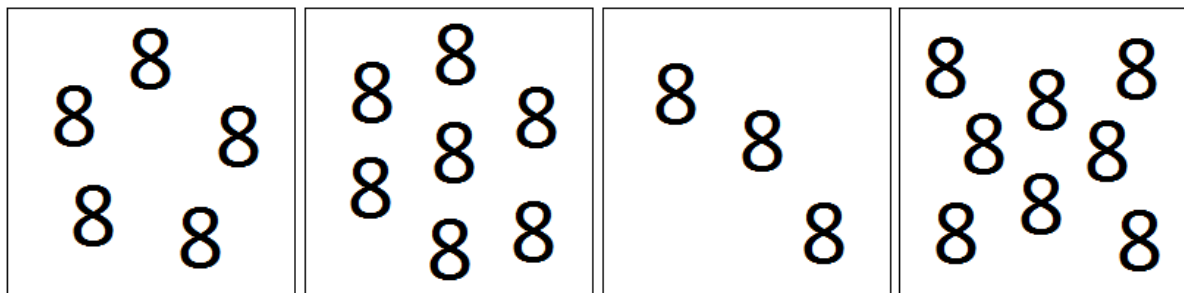


.....

.....

.....

.....



.....

.....

.....

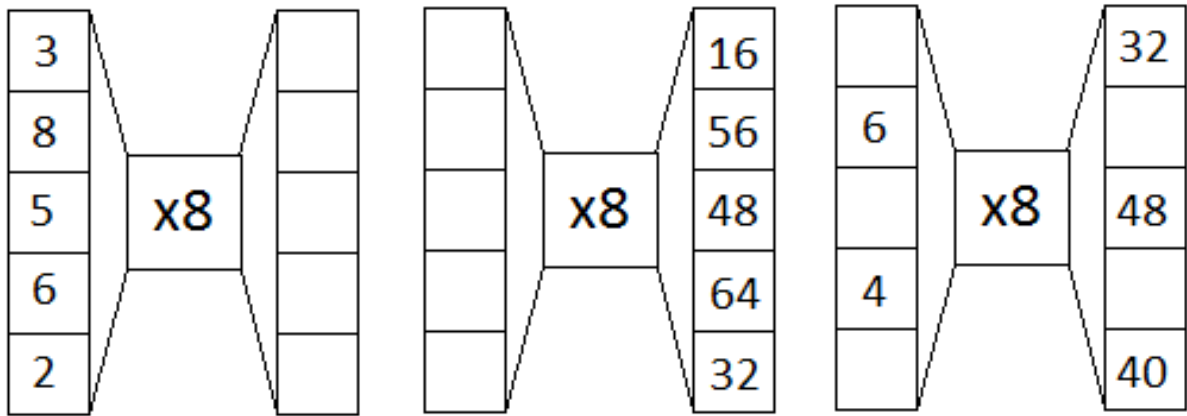
.....

- | | | | |
|---------------|---------------|---------------|---------------|
| 1 x 8 = | 2 x 8 = | 7 x 8 = | 8 x 8 = |
| 5 x 8 = | 2 x 8 = | 2 x 8 = | 7 x 8 = |
| 5 x 8 = | 8 x 8 = | 1 x 8 = | 9 x 8 = |
| 8 x 8 = | 7 x 8 = | 5 x 8 = | 4 x 8 = |
| 2 x 8 = | 5 x 8 = | 5 x 8 = | 4 x 8 = |

Schrijf op welke som bij dit verhaaltje hoort en reken hem uit!

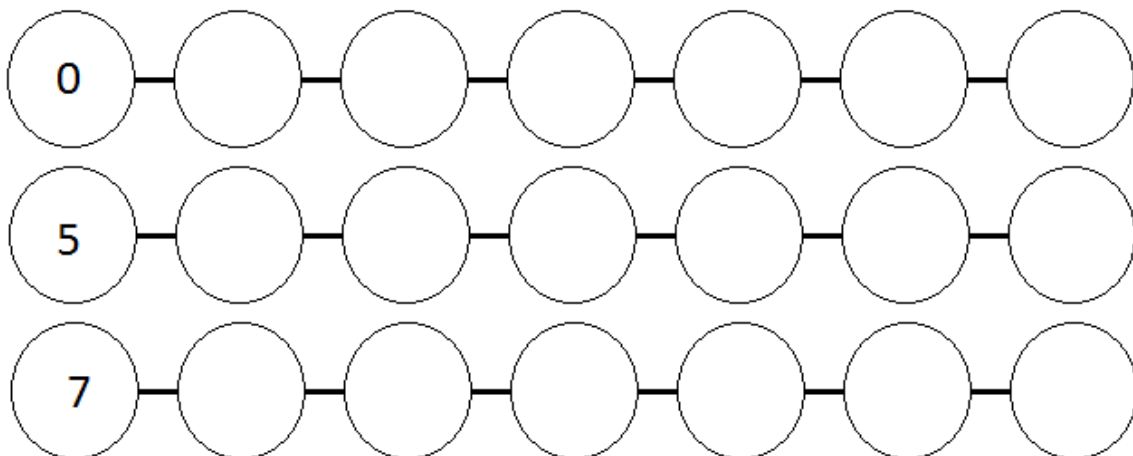
Noah koopt zeven springtouwen. Elke touw kost acht euro. Hoeveel moet Noah betalen?

Er zitten acht stukjes aan de chocoladereep. Hoeveel stukjes zitten aan vijf repen?


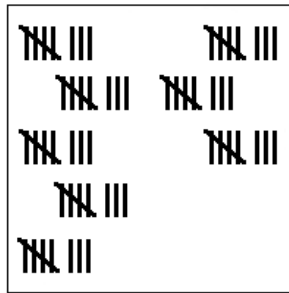
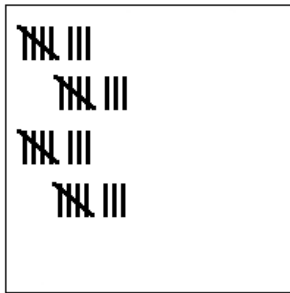
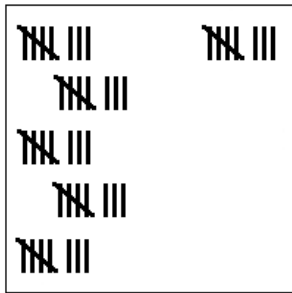


- | | | | |
|----------------|----------------|----------------|----------------|
| 1 x 8 = | 10 x 8 = | 10 x 8 = | 9 x 8 = |
| 10 x 8 = | 4 x 8 = | 8 x 8 = | 2 x 8 = |
| 8 x 8 = | 1 x 8 = | 3 x 8 = | 10 x 8 = |
| 9 x 8 = | 8 x 8 = | 3 x 8 = | 7 x 8 = |
| 1 x 8 = | 1 x 8 = | 1 x 8 = | 8 x 8 = |
| 8 x 8 = | 5 x 8 = | 2 x 8 = | 4 x 8 = |
| 9 x 8 = | 3 x 8 = | 6 x 8 = | 6 x 8 = |
| 5 x 8 = | 8 x 8 = | 8 x 8 = | 9 x 8 = |
| 7 x 8 = | 3 x 8 = | 2 x 8 = | 3 x 8 = |
| 7 x 8 = | 5 x 8 = | 3 x 8 = | 9 x 8 = |

Tel met sprongen van 8.



Schrijf de som op die bij het plaatje hoort en bereken de uitkomst.

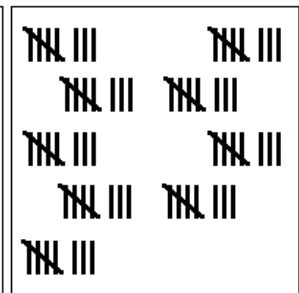
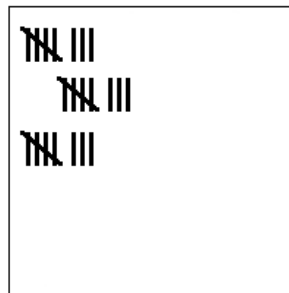
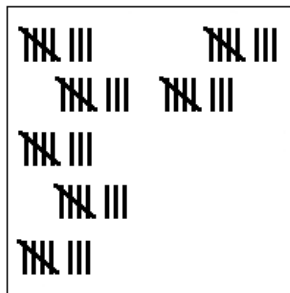
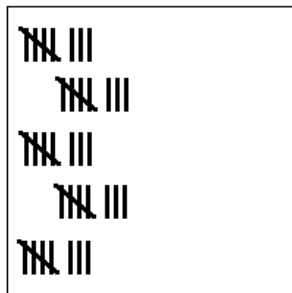


.....

.....

.....

.....



.....

.....

.....

.....

9 x 8 =

1 x 8 =

4 x 8 =

2 x 8 =

6 x 8 =

5 x 8 =

4 x 8 =

2 x 8 =

2 x 8 =

7 x 8 =

3 x 8 =

8 x 8 =

2 x 8 =

4 x 8 =

3 x 8 =

9 x 8 =

8 x 8 =

5 x 8 =

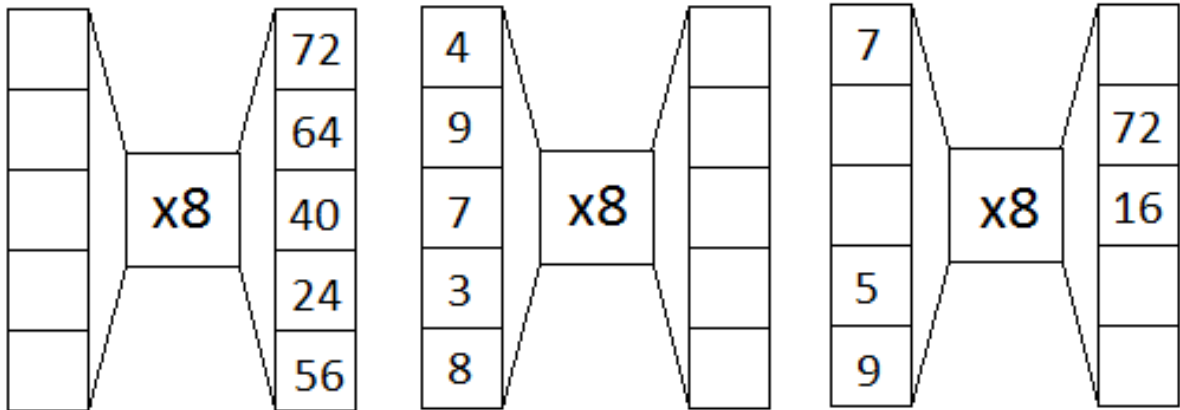
10 x 8 =

4 x 8 =

Schrijf op welke som bij dit verhaaltje hoort en reken hem uit!

Er zitten vier knoopjes op een blouse. Tess heeft acht blouses. Hoeveel knoopjes heeft ze?

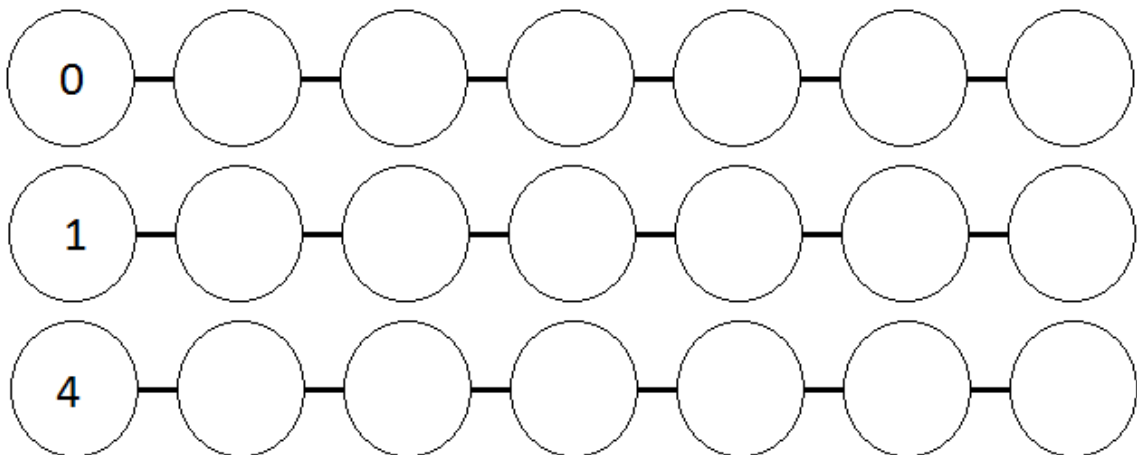
Hoeveel is negen keer acht?



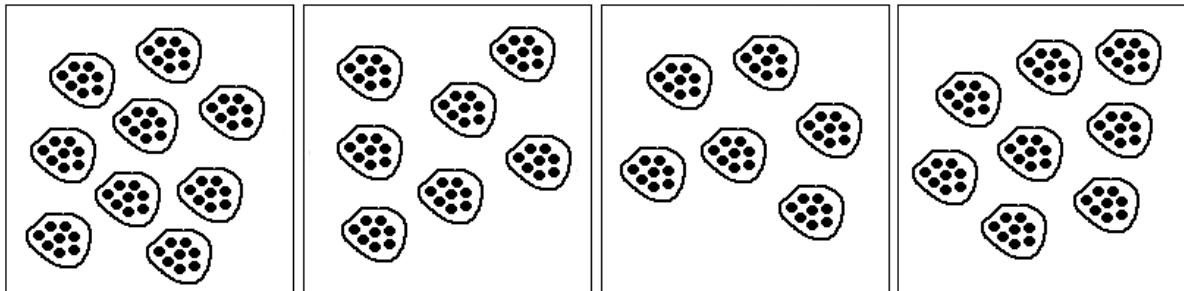
$6 \times 8 = \dots$	$3 \times 8 = \dots$	$6 \times 8 = \dots$	$10 \times 8 = \dots$
$10 \times 8 = \dots$	$5 \times 8 = \dots$	$6 \times 8 = \dots$	$4 \times 8 = \dots$
$7 \times 8 = \dots$	$9 \times 8 = \dots$	$2 \times 8 = \dots$	$3 \times 8 = \dots$
$3 \times 8 = \dots$	$5 \times 8 = \dots$	$1 \times 8 = \dots$	$4 \times 8 = \dots$
$5 \times 8 = \dots$	$5 \times 8 = \dots$	$1 \times 8 = \dots$	$6 \times 8 = \dots$

$8 \times 8 = \dots$	$10 \times 8 = \dots$	$6 \times 8 = \dots$	$1 \times 8 = \dots$
$6 \times 8 = \dots$	$7 \times 8 = \dots$	$8 \times 8 = \dots$	$3 \times 8 = \dots$
$7 \times 8 = \dots$	$1 \times 8 = \dots$	$2 \times 8 = \dots$	$5 \times 8 = \dots$
$8 \times 8 = \dots$	$7 \times 8 = \dots$	$1 \times 8 = \dots$	$6 \times 8 = \dots$
$4 \times 8 = \dots$	$8 \times 8 = \dots$	$6 \times 8 = \dots$	$6 \times 8 = \dots$

Tel met sprongen van 8.



Schrijf de som op die bij het plaatje hoort en bereken de uitkomst.

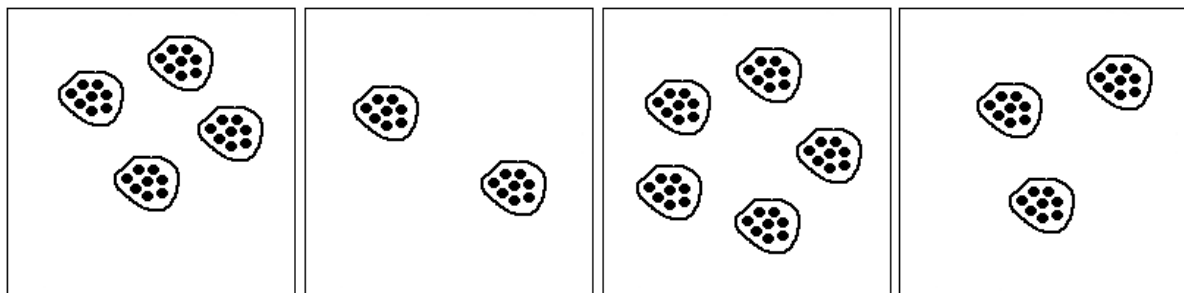


.....

.....

.....

.....



.....

.....

.....

.....

- | | | | |
|-----------------------|-----------------------|-----------------------|-----------------------|
| $5 \times 8 = \dots$ | $10 \times 8 = \dots$ | $5 \times 8 = \dots$ | $10 \times 8 = \dots$ |
| $7 \times 8 = \dots$ | $7 \times 8 = \dots$ | $8 \times 8 = \dots$ | $7 \times 8 = \dots$ |
| $5 \times 8 = \dots$ | $9 \times 8 = \dots$ | $9 \times 8 = \dots$ | $9 \times 8 = \dots$ |
| $10 \times 8 = \dots$ | $6 \times 8 = \dots$ | $10 \times 8 = \dots$ | $9 \times 8 = \dots$ |
| $4 \times 8 = \dots$ | $5 \times 8 = \dots$ | $7 \times 8 = \dots$ | $4 \times 8 = \dots$ |

Schrijf op welke som bij dit verhaaltje hoort en reken hem uit!

Jayden werkt acht uur per dag, vier dagen per week. Hoeveel uur werkt Jayden per week?

Laura is acht jaar. Hoeveel seizoenen heeft ze meegemaakt?
