

Rekenkaartspel - De prinses op de erwt



Begin:


Je speelt met 2 tot 6 spelers. De kaarten liggen geschud en afgedekt in het midden.

Spel:

Om beurten pak je een kaart en los je de som op. Bij een goed antwoord mag je de kaart houden, anders leg je het onder aan de stapel. Soms zit er ook een speciale kaart tussen.


Einde:

Als de kaarten op zijn, tel je hoeveel kaarten iedere speler heeft. Degene met de meeste kaarten heeft gewonnen.



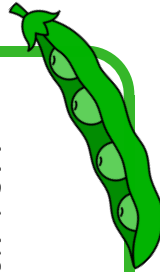
Twee matrassen op
elkaar.

Je mag twee beurten
na elkaar.



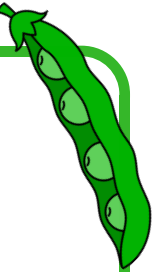
Drie matrassen op
elkaar.

Je mag drie beurten
na elkaar.



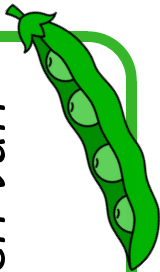
Vier matrassen op
elkaar.

Je mag vier beurten
na elkaar.




Vijf matrassen op
elkaar.

Pak vijf kaarten van
anderen.




Zes matrassen op
elkaar.

Pak zes kaarten van
anderen.




Zeven matrassen op
elkaar.

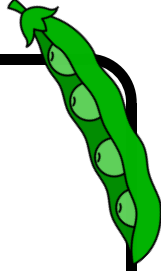
Pak zeven kaarten
van anderen.



$10-2$

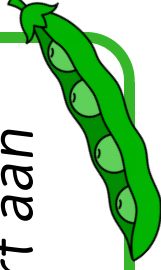


$20-6$




*De koningin verzor
een list.*

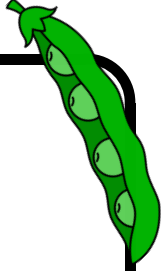
*Geef een kaart aan
een ander.*



$17-5$




$9-2$

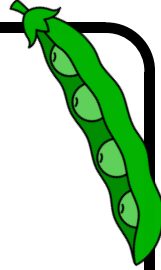


*De neppe prinsessen
sliepen goed.*


Sla een beurt over.



$8-3$




$20-7$




*De echte prinses
kon niet slapen.*


Sla een beurt over.



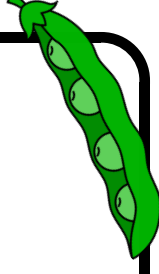
$7-5$



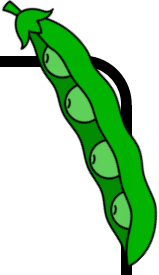
$12-8$



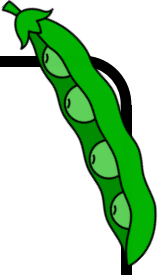
$20-8$




$20-5$




$9-3$




$16-7$




$10-9$




$18-5$




$8-4$



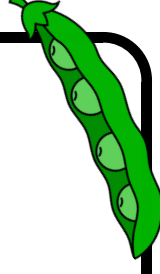
$7-6$



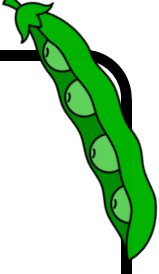
$12-9$




$20-9$



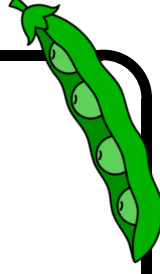
$20-4$




$9-4$




$14-5$



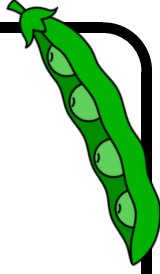
$10-8$



$15-3$



$8-5$




$$6-2$$


$$16-9$$


$$20-10$$


$$20-3$$


$$9-5$$



$$14-6$$


$$10-7$$



$$17-6$$


$$8-6$$

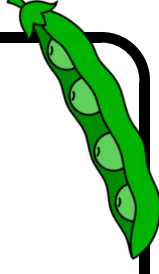
$6-3$



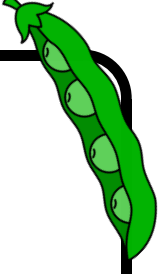
$14-9$




$20-11$




$20-2$




$9-6$




$15-8$




$10-6$



$13-3$



$8-7$




$$6-4$$


$$19-2$$


$$20-12$$


$$18-9$$


$$9-7$$



$$16-9$$


$$10-5$$



$$20-19$$


$$7-1$$

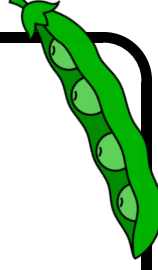
$6-5$



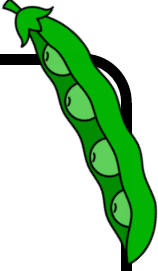
$18-4$



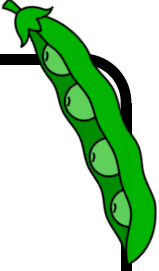
$4-2$




$6-8$




$9-8$




$20-13$




$10-4$



$20-18$



$7-2$




$$5-2$$


$$16-5$$


$$4-3$$


$$14-7$$


$$8-1$$



$$20-14$$


$$10-3$$

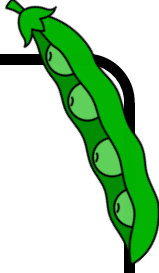

$$20-17$$


$$7-3$$


$7-4$




$12-6$



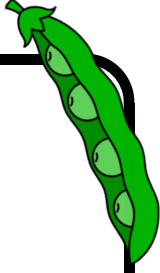
$5-3$




$20-16$



$8-2$




$17-4$



Rekenspel - De prinses op de erwt

... is ontworpen door Lessen van Lisa. Het is toegestaan dit spel te delen, maar enkel onder vermelding van de bron. De lay-out van het spel is gemaakt met Canva en de afbeeldingen zijn afkomstig van ZipADeeDooDahDesigns.

$20-15$



$5-4$

